




# ALL ABOUT AUSTRALIAN COINS

## What did I learn?

Name: \_\_\_\_\_

Answer the questions to show how much you have learnt about Australian coins.


1. Which side of the coin is being shown in each picture? Circle your answer.



Heads      Tails




Heads      Tails



Heads      Tails

2. Circle the 5 cent coin and put a line under the \$2 coin.





## ALL ABOUT AUSTRALIAN COINS

3. In the box, circle the coin with the highest value.



4. In the box, circle the coin with the lowest value.



5. How much money is in the piggy bank?

---



6. In the piggy banks, draw two different ways to make 75 cents.

