



CALCULATING WITH AUSTRALIAN NOTES AND COINS

Build the currency




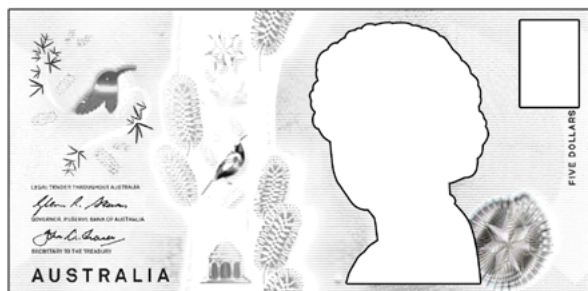
Name: _____

Do you know what each of the Australian notes and coins look like? On the following pages you will find everything you need to complete the notes and coins. You will need to add a value to each one, select the correct image and paste it on, then colour the note or coin the correct colour. You will find the values and images on page 3.





CALCULATING WITH AUSTRALIAN NOTES AND COINS



<input type="checkbox"/>	<input checked="" type="checkbox"/>	<input checked="" type="checkbox"/>
Lower Primary	Primary	Middle Years



CALCULATING WITH AUSTRALIAN NOTES AND COINS



5



50



10



20



100

